

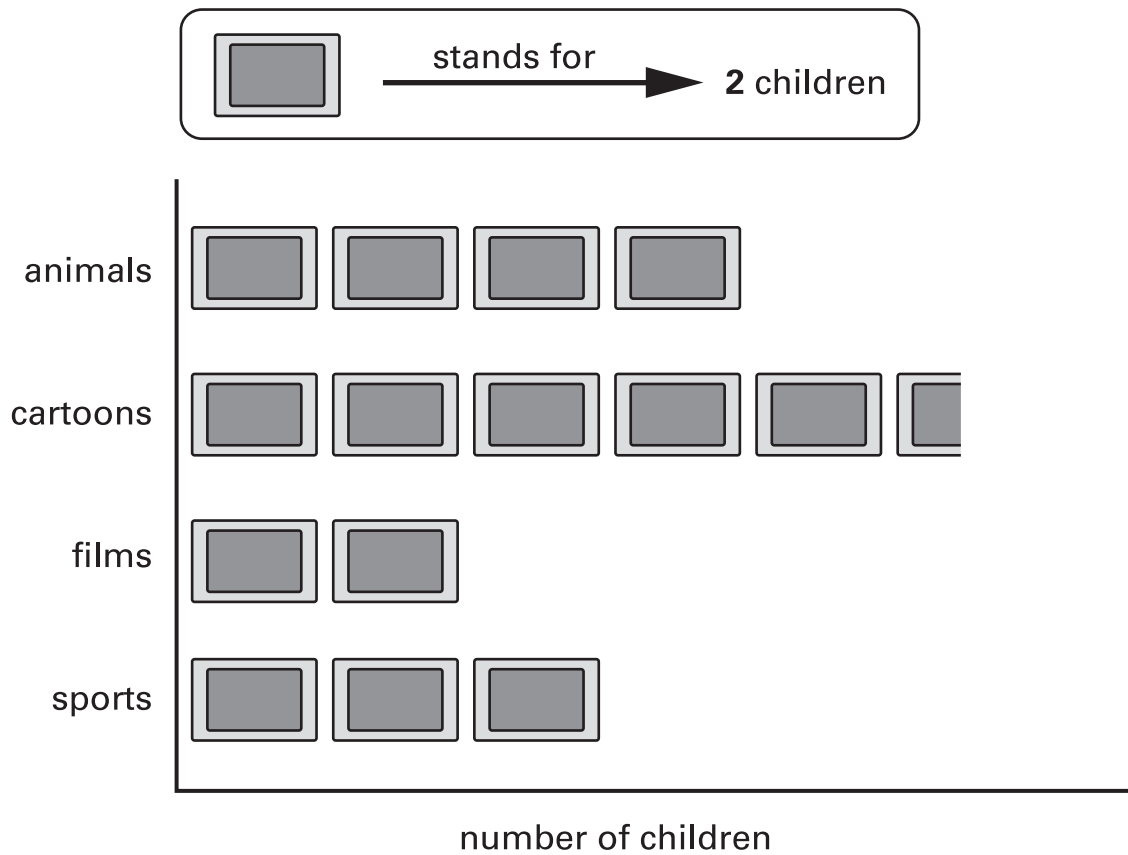
1

Kiz asked each child in his class,

[2003]

'What kind of television programme do you prefer to watch?'

Here are his results.



How many **more** children prefer to watch cartoons than films?



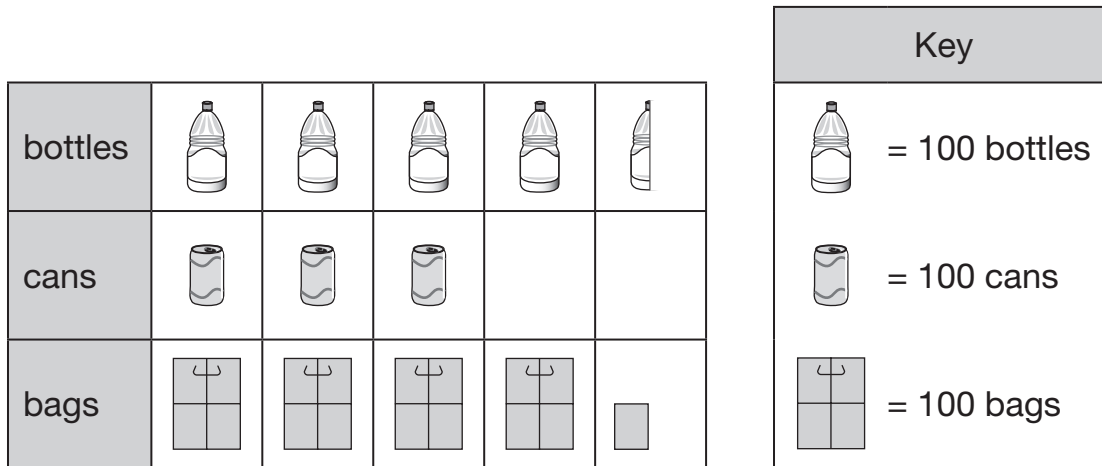
[1 mark]

2

Class 6 collect litter from a park.

[2011]

This chart shows some of the litter they have collected so far.



How many bottles have Class 6 collected?



How many **more** bags than cans have they collected?



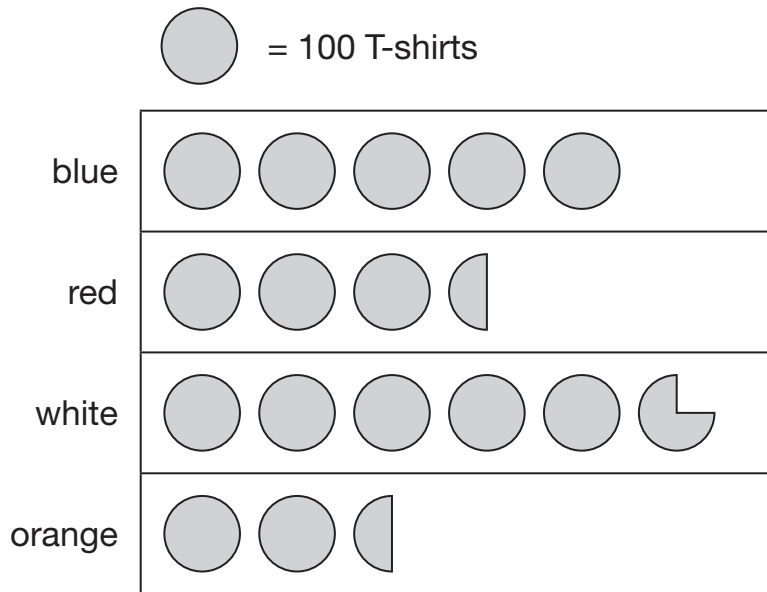
[2 marks]

3

A shop sells T-shirts.

[2014]

This chart shows how many T-shirts were sold in a month.



Write the colours of the T-shirts that sold **more than 400** in the month.



How many red T-shirts and orange T-shirts were sold **altogether**?



How many **more** white than blue T-shirts were sold?







[3 marks]

4

This pictogram shows the number of ice creams a shop sold in one day.

[2013]

 stands for
10 ice creams

vanilla	
strawberry	
chocolate	

How many **more** chocolate than strawberry ice creams were sold?



How many ice creams were sold **altogether**?




[2 marks]














5

Park School collects money for three charities.

[2008]

This pictogram shows how much they have collected.

 stands for £100

 Save Dolphins					
 Wildwatch					
 Plant-a-Tree					

How much more have they collected for Save Dolphins than Plant-a-Tree?



The target for Wildwatch is £500

How much **more** money do they need to collect for Wildwatch?



How much money have they collected altogether, rounded to the nearest hundred pounds?



[3 marks]

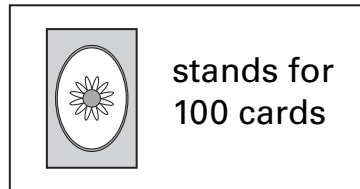
6

[2005]


A shop sells different kinds of greeting cards.




This pictogram shows how many they sold in a week.




Birthday cards



Thank You cards



Get Well cards



Estimate how many Birthday cards were sold.



Estimate how many more Thank You cards than Get Well cards were sold.

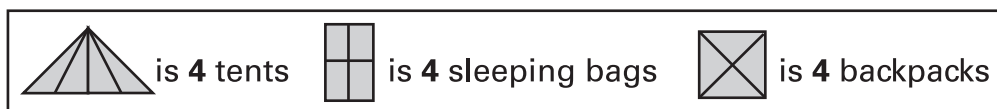















[2 marks]



A camping shop sells **tents**, **sleeping bags** and **backpacks**.
This chart shows how many of each they sold in June.

Items sold in June



tents	 
sleeping bags	   
backpacks	      

The shop had **20** sleeping bags at the **beginning of June**.

How many of these sleeping bags did the shop have left at the **end of June**?



In **July**, the shop sold **three times as many tents** as in June.

How many tents did the shop sell in **July**?

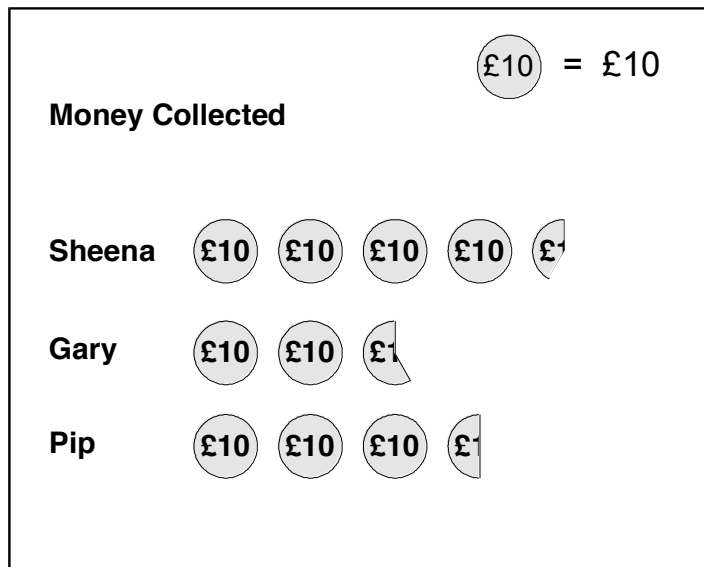


Three children do a sponsored silence.

[Extra]



This is a chart of the money they collected.



Estimate how much **Sheena** collected.

£

Together **Gary** and **Pip** collected **more than £60**.

Explain how the **chart** shows this.

[2 marks]