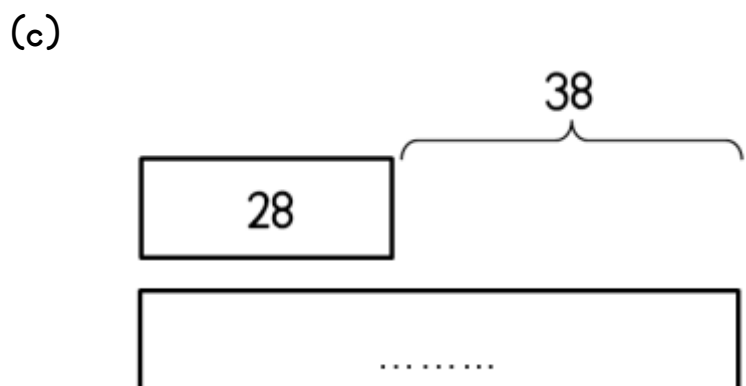
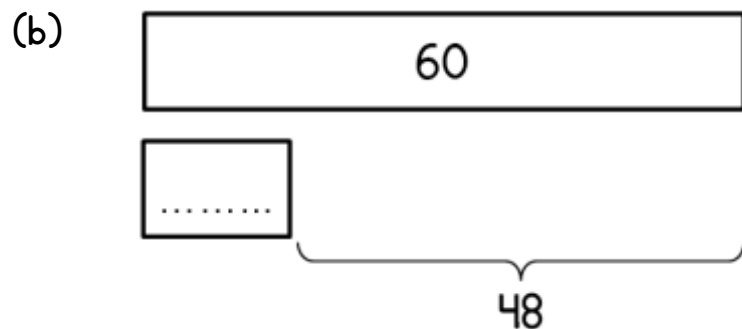
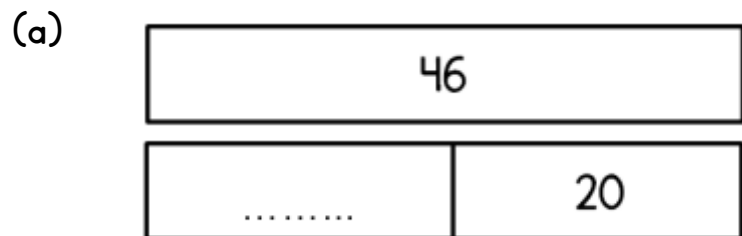


# Bar Models 2

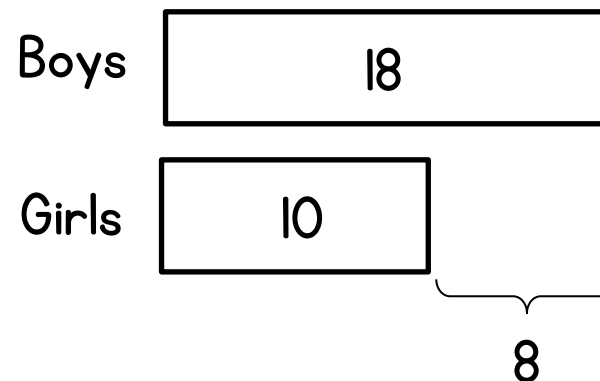
Name: \_\_\_\_\_

Teacher: \_\_\_\_\_

1 Work out the missing values.



2 The bar model shows information about children in a class.



Complete the following sentences

There are ..... boys in the class.

There are ..... girls in the class.

There are 8 ..... boys in the class than girls.


There are 8 ..... girls in the class than boys.

There are ..... children in the class.

3

Sarah has 15 more flowers than Katya.

Show this on the diagram.

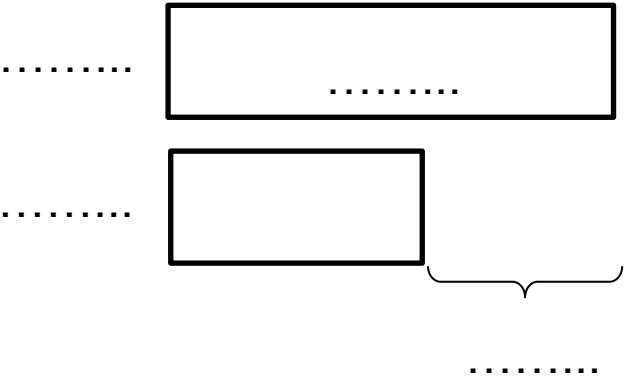


4

Rory bakes 24 buns.

His Mum bakes 10 fewer buns.

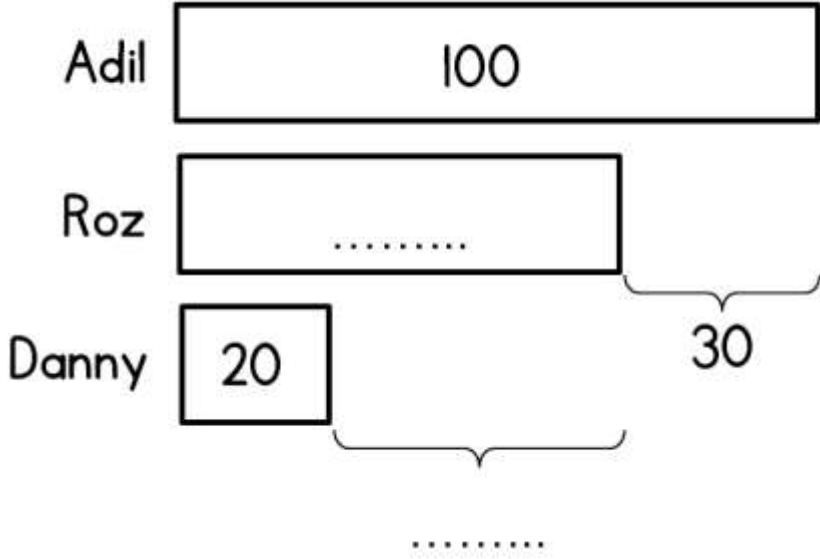
Complete the diagram.



5

Adil, Roz and Danny have some bricks.

Complete the missing values.



Complete the following sentences

Adil has 100 bricks.

Roz has 30 ..... bricks than Adil.

Roz has ..... more bricks than Danny.

Adil has ..... bricks than Danny